

DAV PUBLIC SCHOOL, IFFCO, PARADEEP
SUMMER HOLIDAY HOME WORK
CLASS - III
SESSION - 2022-23

SUB	DESCRIPTION
ENGLISH	<ol style="list-style-type: none">1. Make a book mark with a moral value written on it.2. Cut and collect at least 10 words of special names and common names from newspaper and paste it in your hw copy.3. Make a chart of singular and plural forms. (10each with pictures)4. Write the news headlines in your news copy everyday (date wise).5. Watch the BBC News channel everyday.
HINDI	<ol style="list-style-type: none">1- कोई एक साहस भरी छोटी सी कहानी लिखिए ।(only hw copy)2- महाराष्ट्र और ओडिशा में पानी के कौन-कौन से स्रोत(resources) पाए जाते हैं ? उन स्रोतों का नाम चार्ट पेपर लिखकर चित्र बनाइए । महाराष्ट्र और ओडिशा के स्रोत अलग भागों में बाँटकर बनाइए ।3- दस नाम वाले और दस काम वाले शब्द लिखिए ।(hw copy)
ODIA	<p>ବିଷୟ ଆଧାରରେ ନିମ୍ନରେ ବିଆଣ୍ଡାକର୍ତ୍ତୃତା ପ୍ରଶ୍ନ ନମ୍ବରର ଭିତର homework ଖାତାରେ ଲେଖ । କହିବା ଆଗରୁ କରାଯାଏ -ପ୍ରଶ୍ନ ନମ୍ବର - 9, 10, 11, 12 ରଚନା ଲେଖା- ତୁମ ସହର ବର୍ଣ୍ଣବୋଧ ବହିରୁ ଯୁକ୍ତାନ୍ତର ଥିବା ଦୁଇଟି ଲେଖାଏଁ ଶବ୍ଦ ଲେଖ । ହସ୍ତାନ୍ତର - ଦଶ ପୃଷ୍ଠା</p> <p>(ପ୍ରତିଦିନ ଗୋଟିଏ ପୃଷ୍ଠା)</p>


MATHEMATICS SUMMER HOLIDAY HOMEWORK(Class – III)

- Learn tables from 2 to 25 and write in the copy.
- Paste the picture of a great mathematician of India and write 10 lines about him.
- Do sum more maths from exercise 1 to 32 (Except exercise 16).
- Solve these Olympiad questions in the copy.

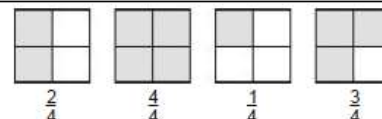
1. A class collected seven hundred fourteen box tops. Which number represents seven hundred fourteen?
(A) 704 (B) 714 (C) 740 (D) 741
2. What is the standard form of $7,000 + 800 + 20 + 5$?
(A) 7,285 (B) 7,825
(C) 7,852 (D) 7,528
3. The students count 149 balls in the gym. What is another way of writing the number of balls in the gym?
(A) Fourteen nine (B) One forty-nine
(C) One hundred forty-nine (D) One hundred fourteen nine
4. Which place value is used to prove that 5,487 is less than 5,874?
(A) Ones place (B) Tens place (C) Hundreds place (D) Thousands place

5. Tina shades in 3 spaces on a game board.
What fraction of the game board is shaded?
(A) $\frac{3}{6}$ (B) $\frac{3}{5}$
(C) $\frac{3}{3}$ (D) $\frac{6}{3}$

Game Board

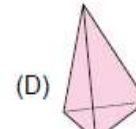
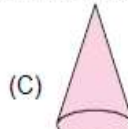
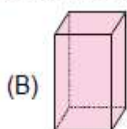
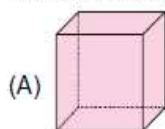


6. Monty drew models of fractions on the board and asked his students to compare them.
Which example shows the fractions listed in order from greatest to least?

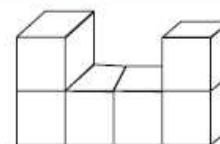




- (A) $\frac{2}{4}, \frac{4}{4}, \frac{1}{4}, \frac{3}{4}$ (B) $\frac{4}{4}, \frac{3}{4}, \frac{1}{4}, \frac{2}{4}$
(C) $\frac{4}{4}, \frac{3}{4}, \frac{2}{4}, \frac{1}{4}$ (D) $\frac{1}{4}, \frac{2}{4}, \frac{3}{4}, \frac{4}{4}$

7. What property of addition will help you find the answer to the problem: $6 + 0 = ?$
(A) Zero plus any number equals zero
(B) Zero plus any number equals that number
(C) Zero minus any number equals that number
(D) Zero minus any number equals zero
8. Sara and 3 of her friends together made a poster. They drew 8 rows of squares with 6 squares in each row. How many squares did Sara and her friends draw on the poster?
(A) 48 (B) 42 (C) 40 (D) 17
9. Joy has 363 baseball cards. Mickey has 288, John has 412, and Kevin has 126. How many do they have all together?
(A) 1,089 (B) 1,179 (C) 1,189 (D) 1,279
10. Which of the following has a curved surface and a flat surface?



11. How would this block model look from the top?

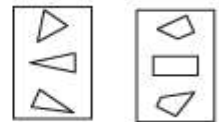


12. Komal built a birdhouse at summer camp.
What shape is the piece of wood that was cut out to make the door of his birdhouse?




13. Mrs. Ryan shows her class two groups of shapes. Then she asks, "Which rule was used to sort these shapes into groups?"

- (A) Large things and small things
- (B) Triangles and squares
- (C) Circles and figures with 4 sides
- (D) Triangles and figures with four sides



14. Joshua is weaving a pattern into a rug. What would most likely come next?

- (A) ● ● ● ● ● ●
- (B) ○ ○ ○ ○ ○ ○
- (C) △ △ △ △ △ △
- (D) ▼ ▼ ▼ ▼ ▼ ▼



15. Meena made this pattern with balls:



Which of the following uses a rule most different from Meena's pattern?

- (A)
- (B)
- (C)
- (D)

16. If Pawan has baseball practice every fourth day in the month of March, starting with March 1, what date will be his last day of practice for the month?

- (A) March 28
- (B) March 29
- (C) March 30
- (D) March 31

MARCH						
S	M	T	W	Th	F	S
				1	2	3
4	5	6	7	8	9	10
11	12	13	14	15	16	17
18	19	20	21	22	23	24
25	26	27	28	29	30	31

17. The rule for sorting is "has four or more corners." Which group has been sorted correctly?

- (A)
- (B)
- (C)
- (D)

18. Third-grade students went to a theatre in 8 buses. Each bus took 45 students. How many students went to the theatre?

- (A) 320
- (B) 360
- (C) 380
- (D) 3240

19. On Friday, 1250 people visited the zoo. Three times as many people visited on Saturday than on Friday. How many people visited the zoo on Saturday?

- (A) 3615
- (B) 3650
- (C) 3750
- (D) 3753

20. During Field Day, 1624 students from Shimla Hill School were equally divided into 8 different events. How many students were in each event?

- (A) 203
- (B) 206
- (C) 221
- (D) 224

SCIENCE

[1] Write 10 uses of different sense organs present in our body.

[2] Match the following:

- (i) smell
- (ii) sight
- (iii) touch
- (iv) sound
- (v) taste
- (a) eye
- (b) nose
- (c) ear
- (d) tongue
- (e) hand

[3] Answer the following question:

- (i) What connects the sense organs to the brain?
- (ii) Name two important functions performed by the nose.
- (iii) How should we take care of our eyes?
- (iv) Which sense organ helps us to distinguish between bad smell and good fragrance.
- (v) Why do kids like sweets the best ?
- (vi) Name the body part which holds eyes, nose and ears.
- (vii) Name the largest sense organ present in our body.
- (viii) Write five ways of taking care of sense organs.
- (ix) Which part of an elephant is considered as its nose ?
- (x) Which sense organ do we have inside our mouth ?
- (xi) Name two sense organs present in our body in pairs.
- (xii) Is it wise to clean the inner part of our ear with sharp objects ?
- (xiii) Name the sense organ which covers our whole body.
- (xiv) We have two eyes present in our body. Is it possible to see with one eye ?
- (xv) Write two ways of keeping your skin healthy.

[4] Fill in the blanks:

- (i) The _____ tell us about the shape, size and colour of an object.
- (ii) The _____ pick up sounds around us.
- (iii) _____ on the tongue tell us about the different tastes.
- (iv) We should keep our _____ clean and protect them from damage.

**SOCIAL
SCIENCE**

1. On an outline map of India, label and colour the states of India.
2. Why are some children awarded by the President on Republic Day? Write three sentences about any one child who received the award 2019-20.
3. Name the famous food items of any ten states of India .
4. Write briefly about the topic
" Our duty towards the elder members and kids of our family"

5. Make a Thank you card for a family member. Mention the reason for your gratitude. You can make the card in your notebook or sheet whatever is available at home.
6. Whenever you read any new word write it down in your copy. Try to write at least two words daily.
7. Write five to six lines on your state and city.
8. List four steps that can ensure healthy eating habits in your family.
9. List three methods by which you can avoid wastage of food and water.
10. Answer the following questions:
 1. Which is your favourite game/sport?
 - 2 . What are the benefits of the game/sport ?
 3. Which is your favourite story? Name your favourite character from that story. Why do you like that character?

SIGNATURE OF THE SUBJECT TEACHERS OF CLASS III A AND B

ENGLISH

SEC A

SEC B

HINDI

SEC A

SEC B

ODIA

SEC A

SEC B

MATHEMATICS

SEC A

SEC B

SCIENCE

SEC A

SEC B

SOCIAL SCIENCE

SEC A

SEC B

SIGNATURE OF THE CLASS TEACHER

SIGNATURE OF THE SUPERVISOR